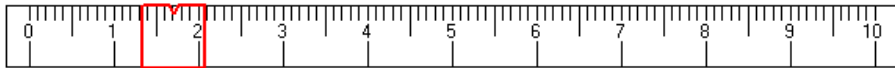
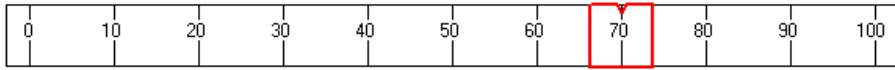


Measuring with Precision PRACTICE

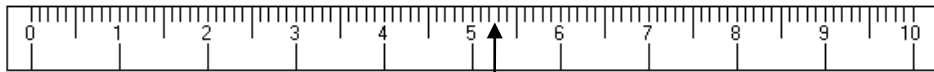
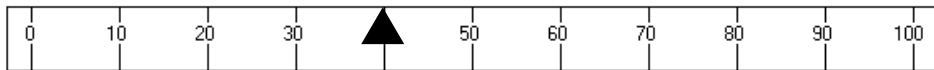
Name: _____

Date: _____ Per: _____

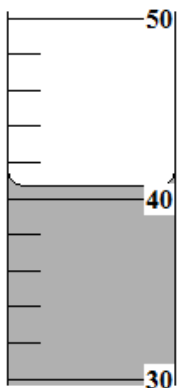
For the following pictures of scientific instruments, record the measurement with as much precision as the tool will allow. (Remember from class and our notes, measure to least count and then estimate one more digit.)



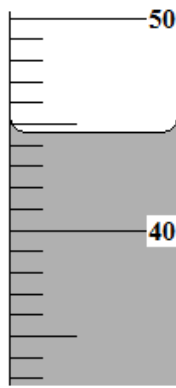
1. _____ grams



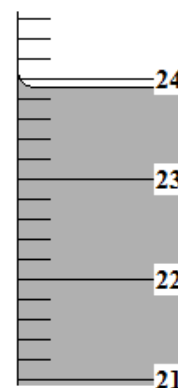
2. _____ grams



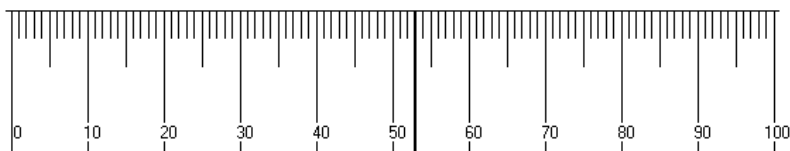
3. _____ mL



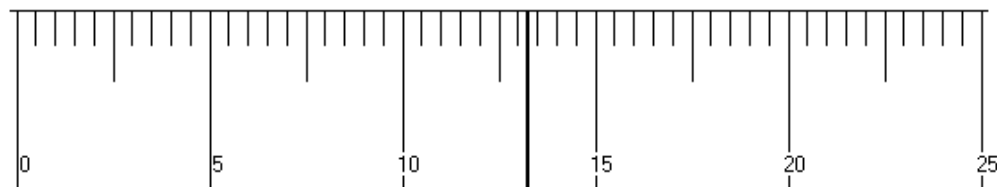
4. _____ mL



5. _____ mL



6. _____ cm



7. _____ cm